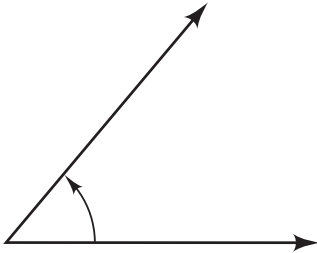


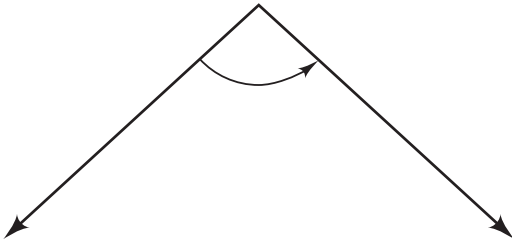
Labsheet 1.4**Question E Angles**

Find the measures of the angles. Use an angle ruler or a protractor.

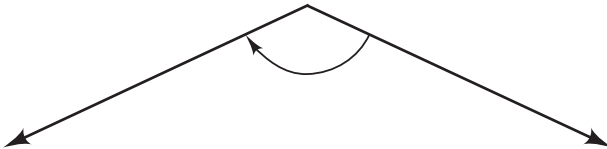
1.



2.



3.



4.

