

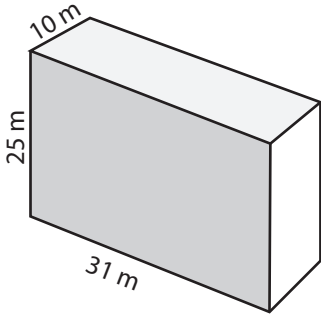
Name : \_\_\_\_\_

Score : \_\_\_\_\_

### Surface Area - Rectangular Prism

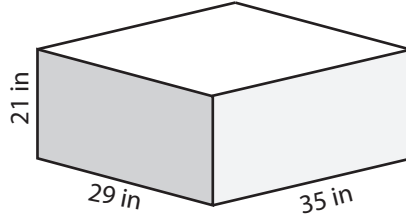
Find the surface area of each rectangular prism.

1)



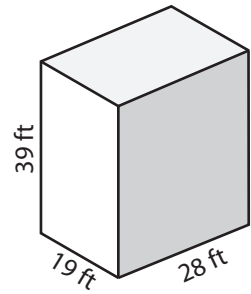
Surface Area = \_\_\_\_\_

2)



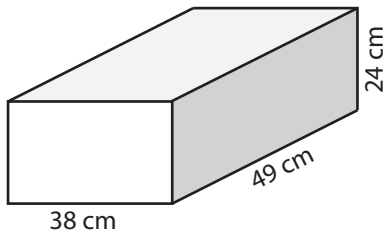
Surface Area = \_\_\_\_\_

3)



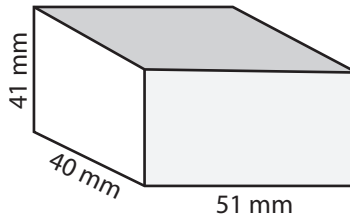
Surface Area = \_\_\_\_\_

4)



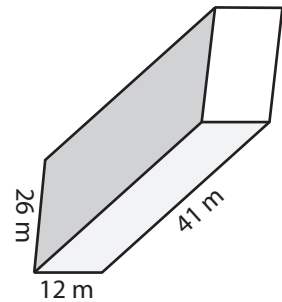
Surface Area = \_\_\_\_\_

5)



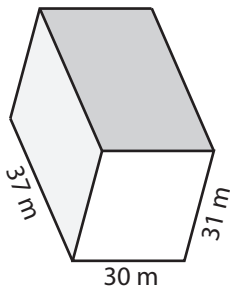
Surface Area = \_\_\_\_\_

6)



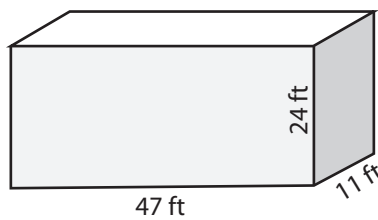
Surface Area = \_\_\_\_\_

7)



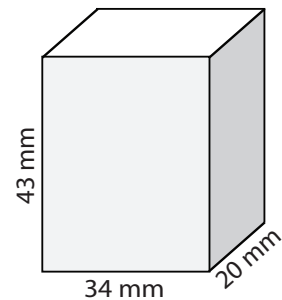
Surface Area = \_\_\_\_\_

8)



Surface Area = \_\_\_\_\_

9)



Surface Area = \_\_\_\_\_

10) Edward Box Makers produces carton boxes each has a length of 40 centimeters, a width of 25 centimeters and a height of 19 centimeters. Find the minimum area of paper required to wrap each box.

Surface Area = \_\_\_\_\_

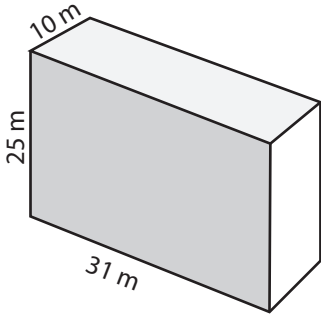
Name : \_\_\_\_\_

Score : \_\_\_\_\_

**Answer Key**

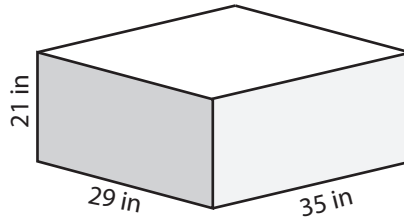
Find the surface area of each rectangular prism.

1)



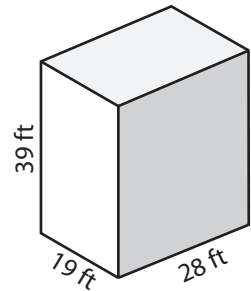
Surface Area = 2670 m<sup>2</sup>

2)



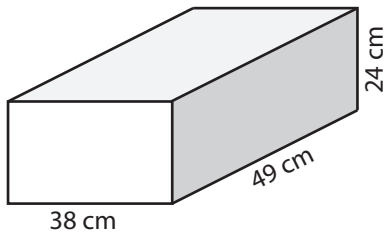
Surface Area = 4718 in<sup>2</sup>

3)



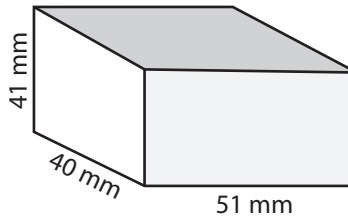
Surface Area = 4730 ft<sup>2</sup>

4)



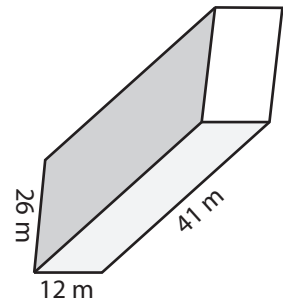
Surface Area = 7900 cm<sup>2</sup>

5)



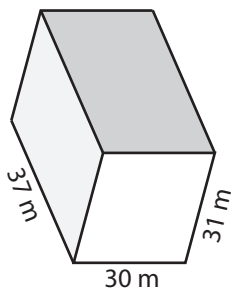
Surface Area = 11542 mm<sup>2</sup>

6)



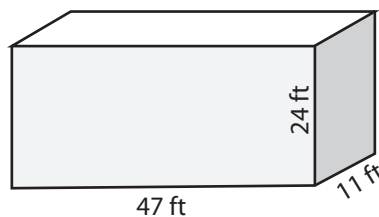
Surface Area = 3740 m<sup>2</sup>

7)



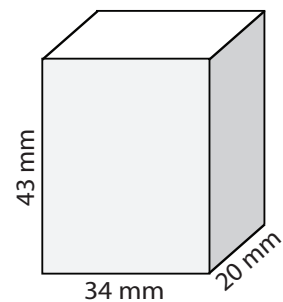
Surface Area = 6374 m<sup>2</sup>

8)



Surface Area = 3818 ft<sup>2</sup>

9)



Surface Area = 6004 mm<sup>2</sup>

10) Edward Box Makers produces carton boxes each has a length of 40 centimeters, a width of 25 centimeters and a height of 19 centimeters. Find the minimum area of paper required to wrap each box.

Surface Area = 4470 cm<sup>2</sup>